






WRM small step: Pictograms

Fluency Tasks (1):

1) The pictogram shows the number of ice-creams that were eaten on a Saturday.

Ice cream flavours	Number eaten
Vanilla	
Strawberry	
chocolate	
mint choc chip	





Key
 = 4 ice-creams


Which flavour was the most popular?

Which flavour was the least popular?

How many more vanilla ice-creams were eaten than strawberry?

2) The pictogram shows the eye colour of children in year 3.

Eye colour	Number of children
hazel	
green	
brown	
blue	





Key
 = 5 children


How many people have brown eyes?

Which eye colour is the most popular?

How many more people have blue eyes than green?

3) The pictogram shows the favourite pizza types of children in class 3E.

Pizza type	Number of children
Pepperoni	
Hawaiian	
Vegetarian	
Cheese & tomato	

Key
 = 2 children

Which is the least favourite pizza type?

How many more children voted for cheese & tomato and Vegetarian than Hawaiian?

Fluency Tasks (1) continued:

4) The pictogram shows the number of ice-creams that were eaten on a Saturday.

Colour	Number of children
green	
blue	
red	
purple	

Key
 = 2 children

How many children voted for green and red?

Which colour was the least popular?

How many more children voted for purple and green than red?

5) The pictogram shows the number of books read over the half term holidays in year 3.

Colour	Number of books read
3E	
3D	
3N	
3S	

Key
 = 6 books

Which class read the least number of books?

Which two classes read 45 books between them?

6) Write your own questions about the pictogram.

Class	Number of biscuits sold
3T	
3W	
3E	
3N	

Key
 = 10 biscuits
